

Click to Print logout

Challenges



Staff Selection Commission
(Government Of India)

REGISTRATION NUMBER : KnowledgePhilic.com**EXAM DATE : 30-August-2016****EXAM NAME : SSC Examination 2016****TOTAL MARKS : 200****CANDIDATE NAME : KnowledgePhilic.com****EXAM START TIME : 10:00:00****EXAM DURATION : 01:15 Hrs****TOTAL NO OF QUESTIONS : 100**

Question 1. Select the related word/letters/number from the given alternatives.

दिये गये विकल्पों में से संबन्धित शब्द/अक्षरों/संख्या को चुनिए।

Flow : River :: Stagnant : ?

बहाव : नदी :: स्थिर : ?

Options:

1) Pond

तालाब

2) Rain

वर्षा

3) Stream

सरिता

4) Canal

नहर

Correct Answer: Pond

तालाब

Candidate Answer: Pond

तालाब

Question 2. Select the related word/letters/number from the given alternatives.

दिये गये विकल्पों में से संबन्धित शब्द/अक्षरों/संख्या को चुनिए।

AEIM : BFJN :: CGKO : ?

Options:

1) DHLI

2) ZVRP

3) BCDK

4) MPQR

Correct Answer: DHLI**Candidate Answer:** DHLI

Question 3. Select the related word/letters/number from the given alternatives.

दिये गये विकल्पों में से संबन्धित शब्द/अक्षरों/संख्या को चुनिए।

24 : 60 :: 210 : ?

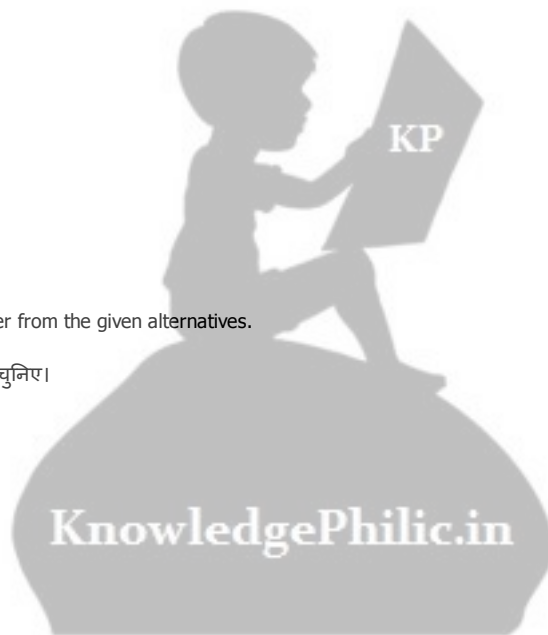
Options:

1) 348

2) 336

3) 340

4) 326

Correct Answer: 336**Candidate Answer:** 336

Question 4.

For the following questions

Find the odd word/letters/number pair from the given alternatives.

दिये गये विकल्पों में से विषम शब्द/अक्षर/संख्या को चुनिए।

Options:

1) Shimla

शिमला

2) Ooty

ऊटी

3) Darjeeling

दार्जिलिंग

4) Agra

आगरा

Correct Answer: Agra

आगरा

Candidate Answer: Agra

आगरा

Question 5.

For the following questions

umber pair from the given alternatives.

दिये गये विकल्पों में से विषम शब्द/अक्षर/संख्या को चुनिए।

Options:

1) 64

2) 900

3) 343

4) 1000

Correct Answer: 900

Candidate Answer: 900

Question 6.

For the following questions

Find the odd word/letters/number pair from the given alternatives.

दिये गये विकल्पों में से विषम शब्द/अक्षर/संख्या को चुनिए।

Options:

1) NSWX

2) KPSU

3) HMQR

4) EJNO

Correct Answer: KPSU

Candidate Answer: KPSU

Question 7. Arrange the following words as per order in the dictionary

निम्नलिखित शब्दों को शब्दकोश में दिए गए क्रम के अनुसार लिखिए।

1. Maternity 2. Matriarchy

3. Matchbox 4. Matricide



Options:

1) 3,1,2,4

2) 4,3,1,2

3) 3,4,1,2

4) 1,3,4,2

Correct Answer: 3,1,2,4**Candidate Answer:** 3,1,2,4

Question 8. A series is given, with one term missing. Choose the correct alternative from the given ones that will complete the series.

दिये गये प्रश्न में एक अनुक्रम दिया है, जिसमें एक पद लुप्त है। दिए गए विकल्पों में से वह सही विकल्प चुनिए जो अनुक्रम को पूरा करे।

EDBA, KJHG, QPNM, ?

Options:

1) WVTS

2) WXUV

3) WVST

4) WVTX

Correct Answer: WVTS**Candidate Answer:** WVTS

Question 9. A series is given, with one term missing. Choose the correct alternative from the given ones that will complete the series.

दिये गये प्रश्न में एक अनुक्रम दिया है, जिसमें एक पद लुप्त है। दिए गए विकल्पों में से वह सही विकल्प चुनिए जो अनुक्रम को पूरा करे।

463, 452, 439, 424, ?

Options:

1) 407

2) 413

3) 419

4) 411

Correct Answer: 407**Candidate Answer:** 407

Question 10. At present, the ratio between the ages of Arun and Deepak is 4:3. After 6 years, Arun's age will be 26 years. What is the age of Deepak at present?

अरुण और दीपक की वर्तमान आयु का अनुपात 4:3 है। 6 साल बाद अरुण की आयु 26 साल होगी। दीपक की वर्तमान आयु बताइए ?

Options:

1) 12 years

12 वर्ष

2) 15 years

15 वर्ष

3) 19½ years

19½ वर्ष

4) 25 years

25 वर्ष

Correct Answer: 15 years

15 वर्ष

Candidate Answer: 15 years

15 वर्ष

Question 11. X is the husband of Y. W is the daughter of X. Z is the husband of W. N is the daughter of Z. What is the relationship of N to Y?

X, Y का पति है। W, X की पुत्री है। Z, W का पति है। N, Z की पुत्री है। N का Y से क्या सम्बन्ध है ?

Options:

- 1) Cousin
चचेरा भाई / चचेरी बहन
- 2) Niece
भानजी/भतीजी
- 3) Daughter
पुत्री
- 4) Grand daughter
पोती

Correct Answer: Grand daughter
पोती

Candidate Answer: Grand daughter
पोती

Question 12. From the given words, select the word which cannot be formed using the letters of the given word.

निम्नलिखित विकल्पों में से वह शब्द चुनिए जो दिए गए शब्द के अक्षरों के प्रयोग से नहीं बनाया जा सकता है।

DETERMINATION

Options:

- 1) DETENTION
- 2) DESTINATION
- 3) TERMINATE
- 4) DOMINATE

Correct Answer: DESTINATION

Candidate Answer: DESTINATION

Question 13. If GOODNESS is coded as HNPCODTR then GREATNESS will be coded as

यदि किसी कोड में 'GOODNESS' को 'HNPCODTR' लिखा जाता है, तो उस कोड में 'GREATNESS' को कैसे लिखा जायेगा ?

Options:

- 1) HQZFBMFRT
- 2) HPFZUMERT
- 3) HQEZUMFTR
- 4) HQFZUMFRT

Correct Answer: HQFZUMFRT

Candidate Answer: HQFZUMFRT

Question 14. Complete the third equation on the basis of a certain system followed in the first two equations.

प्रथम दो समीकरणों के आधार पर तीसरे समीकरण को पूर्ण कीजिये ।

(1) $5*4*2*1 = 1425$ (2) $7*8*1*6 = 6817$ (3) $9*3*7*5 = ?$

Options:

- 1) 3795
- 2) 5397
- 3) 5973
- 4) 5379

Correct Answer: 5379

Candidate Answer: 5379

Question 15. If '-' stands for division, '+' for multiplication, '÷' for subtraction and 'x' for addition, which one of the following equations is correct?

यदि '-' मतलब है भाग, '+' का मतलब है गुणा, '÷' का मतलब है घटाना और 'x' का मतलब है जोड़ना । तो निम्नलिखित में से कौन-सा समीकरण सही है ?

Options:

- 1) $18 \div 3 \times 2 + 8 - 6 = 10$
- 2) $18 - 3 + 2 \times 8 \div 6 = 14$
- 3) $18 - 3 \div 2 \times 8 + 6 = 17$
- 4) $18 \times 3 + 2 \div 8 - 6 = 15$

Correct Answer: $18 - 3 + 2 \times 8 \div 6 = 14$

Candidate Answer: $18 - 3 + 2 \times 8 \div 6 = 14$

Question 16. Find missing pair of letters from given responses to replace ?

दिए गए विकल्पों में से अक्षरों का लुप्त जोड़ा जात कीजिए।

AZ	BY	CX
DW	EV	FU
GT	?	IR

Options:

1) HR

2) HS

3) HV

4) HU

Correct Answer: HS

Candidate Answer: HS

Question 17. X walked 20 feet from A to B in the East direction. Then X turned to the right and walked 6 feet. Again X turned to the right and walked 28 feet. How far is X from A ?

X पूर्व दिशा में A से B तक 20 फीट चला। फिर वह दायीं ओर मुड़कर 6 फीट चला। वह फिर दायीं ओर मुड़ा और 28 फीट चला। X अब A से कितनी दूरी पर है ?

Options:

1) 28

2) 9

3) 10

4) 27

Correct Answer: 10

Candidate Answer: 10

Question 18. Consider the given statement/s to be true and decide which of the given conclusions/assumptions can definitely be drawn from the given statement.

Statement: The situation calls for an immediate action

Assumptions: I. The situation is serious.

II. Immediate action is possible.

निम्नलिखित प्रश्न में एक या दो वक्तव्य दिये गये हैं, जिसके आगे दो निष्कर्ष/मान्यताएं, I और II निकाले गये हैं। आपको विचार करना है कि वक्तव्य सत्य है चाहे वह सामान्यतः शर्त तथ्यों से भिन्न प्रतीत होता हो। आपको निर्णय करना है कि दिए गए वक्तव्य में से कोन-सा निश्चित रूप से सही निष्कर्ष/मान्यता निकाला जा सकता है ?

वक्तव्य : स्थिति पर तुरन्त कार्यवाही की आवश्यकता है।

मान्यता -I : स्थिति गंभीर है।

II : तुरन्त कार्यवाही सम्भव है।

Options:

1) only I is an assumption

केवल निष्कर्ष I सही है।

2) only II is an assumption

केवल निष्कर्ष II सही है।

3) Both I and II are assumptions

दोनों निष्कर्ष I और II सही हैं।

4) Neither I or II is an assumption

ना तो निष्कर्ष I सही है और ना ही निष्कर्ष II

Correct Answer: Neither I or II is an assumption

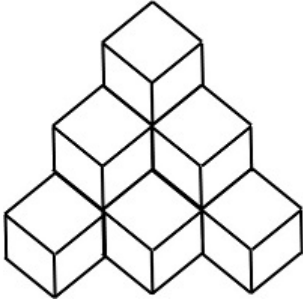
ना तो निष्कर्ष I सही है और ना ही निष्कर्ष II

Candidate Answer: only II is an assumption

केवल निष्कर्ष II सही है।

Question 19. How many cubes are there in the diagram?

आकृति में कितने घन हैं ?



Options:

- 1) 10
- 2) 12
- 3) 8
- 4) 6

Correct Answer: 10

Candidate Answer: 12

Question 20. Identify the diagram that best represents the relationship among classes given below
North America, United States of America, New York

वह आरेख चुनिए जो नीचे दिए गये वर्गों के बीच सम्बंध का सही निरूपण करता है।
उत्तर अमरीका, संयुक्त राज्य अमेरिका, न्यूयार्क

Options:

1)



2)



3)



4)



Correct Answer:



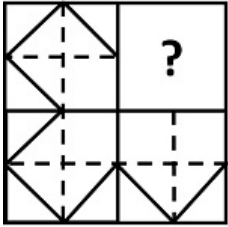
Candidate Answer:



KnowledgePhilic.in

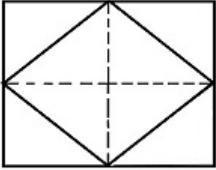
Question 21. Which answer figure will complete the pattern in the question figure?

कौन-सी उत्तर आकृति प्रश्न आकृति के प्रतिरूप को पूरा करेगी ?

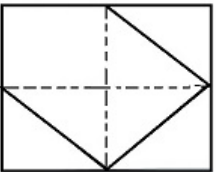


Options:

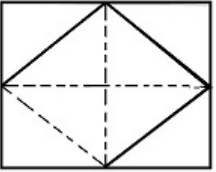
1)



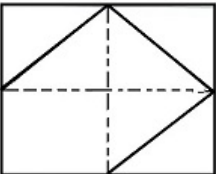
2)



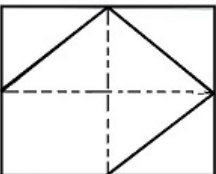
3)



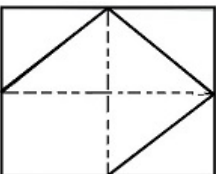
4)



Correct Answer:

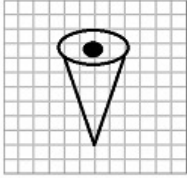


Candidate Answer:



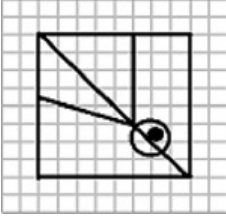
Question 22. From the given answer figures, select the one in which the question figure is hidden/embedded.

दी गई उत्तर आकृति को चुनिए जिसमें प्रश्न आकृति निहित है।

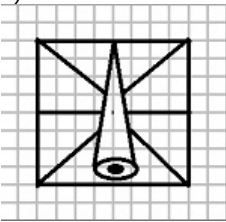


Options:

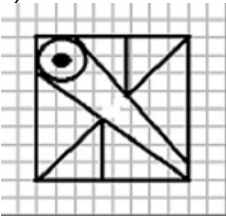
1)



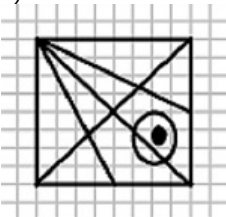
2)



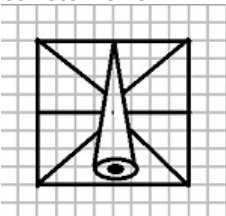
3)



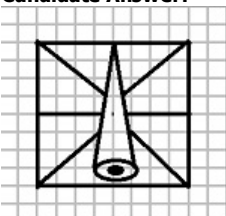
4)



Correct Answer:

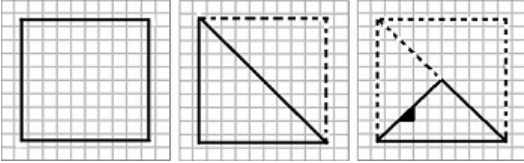


Candidate Answer:

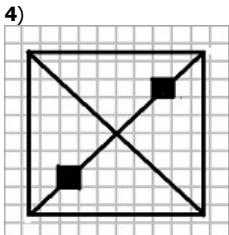
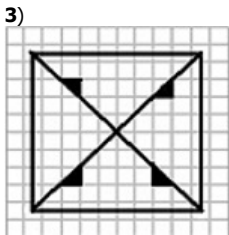
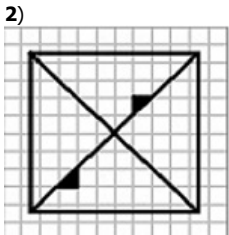
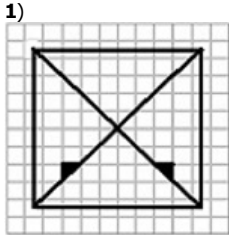


Question 23. A piece of paper is folded and cut as shown below in the question figures. From the given answer figures, indicate how it will appear when opened.

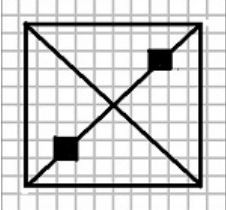
नीचे प्रश्न आकृतियों में चित्र अनुसार कागज को मोड़ने, काटने तथा खोलने के बाद वह किस उत्तर आकृति जैसा दिखाई देगा ?



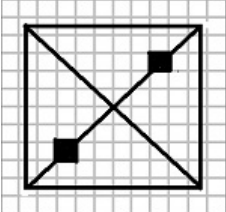
Options:



Correct Answer:

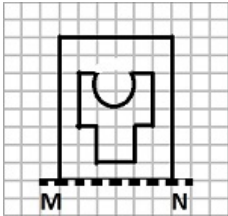


Candidate Answer:



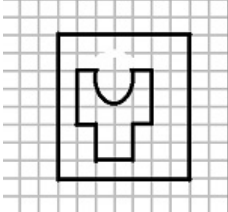
Question 24.If a mirror is placed on the line MN, then which of the answer figures is the right image of the given figure?

यदि एक दर्पण को MN रेखा पर रखा जाए तो दी गई उत्तर आकृतियों में से कौन-सी आकृती प्रश्न आकृति का सही प्रतिबिम्ब होगी ?

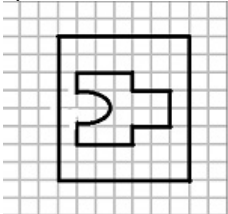


Options:

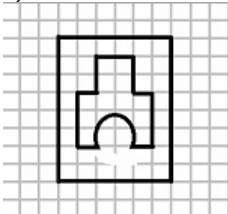
1)



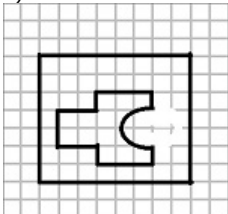
2)



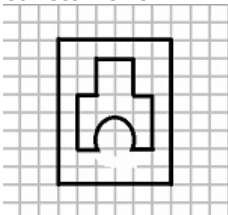
3)



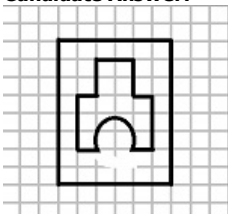
4)



Correct Answer:



Candidate Answer:



Question 25. In the question, a word is represented by only one set of numbers as given in any one of the alternatives. The sets of numbers given in the alternatives are represented by two classes of alphabets as in two matrices given below. The columns and rows of Matrix I are numbered from 0 to 4 and that of Matrix II are numbered from 5 to 9. A letter from these matrices can be represented first by its row and next by its column, e.g., G can be represented by 04, 40, etc., and 'K' can be represented by 56, 75, etc.

You have to identify the set for the word 'HILL'

निम्नलिखित प्रश्न में विकल्पों में दिए गए संख्या-समूह, अक्षरों के दो वर्गों द्वारा दर्शाए गए हैं, जैसे कि नीचे दिए गए दो आव्यूहों में हैं। आव्यूह I के सतम्भ और पंक्ति की संख्या 0 से 4 तक दी गई है, और आव्यूह II के 5 से 9 तक, इन आव्यूहों से एक अक्षर को पहले उसकी पंक्ति और बाद में स्तम्भ संख्या द्वारा दर्शाया जा सकता है। उदाहरण के लिए 'G' को 04, 40 आदि द्वारा दर्शाया जा सकता है तथा 'K' को 56, 75 आदि द्वारा दर्शाया जा सकता है। इसी तरह से आपको दिए हुए शब्द 'HILL' के लिए समूह को पहचानना है।

Matrix - I						Matrix - II				
	0	1	2	3	4	5	6	7	8	9
0	C	D	E	F	G	H	K	L	I	N
1	F	G	C	D	E	I	N	H	K	L
2	D	E	F	G	C	K	L	I	N	H
3	E	F	G	C	D	L	I	N	H	K
4	G	C	D	E	F	N	H	K	L	I

Options:

1) 56, 58, 03, 02

2) 55, 77, 69, 85

3) 56, 62, 03, 02

4) 57, 60, 10, 02

Correct Answer: 55, 77, 69, 85

Candidate Answer: 55, 77, 69, 85

Question 26. Who among the following is not a member of the National Development Council?

निम्नलिखित में से कौन राष्ट्रीय विकास परिषद का सदस्य नहीं है ?

Options:

1) The Prime Minister

प्रधानमंत्री

2) The Member of NITI Aayog

नीति आयोग का सदस्य

3) The Chief Ministers of States

राज्यों के मुख्य मंत्री

4) The President of India

भारत के राष्ट्रपति

Correct Answer: The President of India

भारत के राष्ट्रपति

Candidate Answer: The President of India

भारत के राष्ट्रपति

Question 27. The rate of tax increase as the amount of the tax base increases is called

टैक्स आधार में वृद्धि के अनुरूप कर की दर बढ़ने को क्या कहा जाता है ?

Options:

1) Proportional tax

समानुपाती कर

2) Progressive tax

प्रगतिशील कर

3) Regressive tax

प्रतिगामी कर

4) Degressive tax

हासमान कर

Correct Answer: Progressive tax


प्रगतिशील कर

Candidate Answer: Proportional tax

समानुपाती कर

Question 28. The supply-side economics lays greater emphasis on _____

आपूर्ति पक्ष का अर्थशास्त्र किस पर अधिक जोर देता है ?



Options:

1) Producer

निर्माता

2) Global economy

विश्व अर्थव्यवस्था

3) Consumer

उपभोक्ता

4) Middle Man

बिचौलिया

Correct Answer: Producer

निर्माता

Candidate Answer: Producer

निर्माता

Question 29.The founding father of "Theory of bureaucracy" was

"नौकरशाही के सिद्धान्त" के संस्थापक जनक कौन थे ?

Options:

1) F. W. Taylor

एफ.डब्ल्यू. टेलर

2) Max Weber

मैक्स वेबर

3) Elton Mayo

एल्टन मेयो

4) Herbert Simon

हर्बर्ट साइमन

Correct Answer: Max Weber

मैक्स वेबर

Candidate Answer: [NOT ANSWERED]

Question 30.The United Nations Organisation came into existence in

संयुक्त राष्ट्र संघ कब अस्तित्व में आया ?

Options:

1) 1947

2) 1950

3) 1945

4) 1946

Correct Answer: 1945**Candidate Answer:** 1946

Question 31.Abdul Fazal was the son of which Sufi saint?

अब्दुल फजल किस सूफी संत के पुत्र थे ?

Options:

1) Sheikh Mubarak

शेख मुबारक

2) Hazarat Kwaja

हजरत ख्वाजा

3) Nasiruddin Chirag

नसीरुद्दीन चिराग

4) Baba Qutubuddin Bakhtiyar Kaki

बाबा कुतुबुद्दीन बख्तियार काकी


Correct Answer: Sheikh Mubarak

शेख मुबारक

Candidate Answer: [NOT ANSWERED]

Question 32.French revolution broke out in the year :

फ्रांसीसी क्रान्ति किस वर्ष हुई थी?



Options:

1) 1917

2) 1911

3) 1789

4) 1790

Correct Answer: 1789**Candidate Answer:** 1917

Question 33. The song "Vande Mataram" occurs in the book _____

"वंदेमातरम" गीत किस पुस्तक से लिया गया है ?

Options:

1) Geetanjali

गीतांजली

2) Anandmath

आनन्द मठ

3) Indian People

इण्डियन पीपल

4) Poverty and Un - British Rule in India

पॉवर्टी एण्ड अन-ब्रिटिश रूल इन इण्डिया

Correct Answer: Anandmath

आनन्द मठ

Candidate Answer: Anandmath

आनन्द मठ

Question 34. Which mosquito is the carrier of Zika virus?

ज़ीका वायरस का वाहक कौन सा मच्छर है ?

Options:

1) Culex

क्यूलेक्स

2) Aedes

ऐडिस

3) Anopheles

एनोफीलिस

4) Culiseta

क्यूलिसीटा

Correct Answer: Aedes

ऐडिस

Candidate Answer: [NOT ANSWERED]

Question 35. Geothermal energy is maximum utilised in _____

भूतापीय ऊर्जा का अधिकतम उपयोग कहां होता है ?

Options:

1) Iceland

आइसलैण्ड

2) New Zealand

न्यूज़ीलैण्ड

3) Russia

रूस

4) Japan

जापान

Correct Answer: Iceland

आइसलैण्ड

Candidate Answer: Iceland

आइसलैण्ड

Question 36. Root cap is derived from

जड़ आवरण किससे प्राप्त होता है ?



Options:

- 1) Dermatogen
डर्मटोजन
- 2) Calyptrogen
कैलिप्ट्रोजन
- 3) Protoderm
प्रोटोडर्म
- 4) Histogen
हिस्टोजन

Correct Answer: Calyptrogen
कैलिप्ट्रोजन

Candidate Answer: [NOT ANSWERED]

Question 37. The blotting technique used to identify the isolated protein is _____

विलगित प्रोटीन की पहचान हेतु शोषक तकनीक क्या है ?

Options:

- 1) Northern blotting
उत्तरी शोषक
- 2) Western blotting
पश्चिमी शोषक
- 3) Southern blotting
दक्षिणी शोषक
- 4) Cloning
क्लोनिंग

Correct Answer: Western blotting
पश्चिमी शोषक

Candidate Answer: [NOT ANSWERED]

Question 38. Morphology of Chromosomes can be best studied at _____

गुणसूत्रों की आकृति विज्ञान का अच्छी तरह से अध्ययन किससे किया जा सकता है _____

Options:

- 1) Interphase
अंतरावस्था में
- 2) Prophase
पूर्वावस्था में
- 3) Metaphase
मध्यावस्था में
- 4) Zygotene
जाइगोटीन में

Correct Answer: Metaphase
मध्यावस्था में

Candidate Answer: [NOT ANSWERED]

Question 39. The 'Choke' used with a tube light is basically _____

ट्यूब लाइट के साथ प्रयुक्त 'चोक' मूलतः क्या है ?

Options:

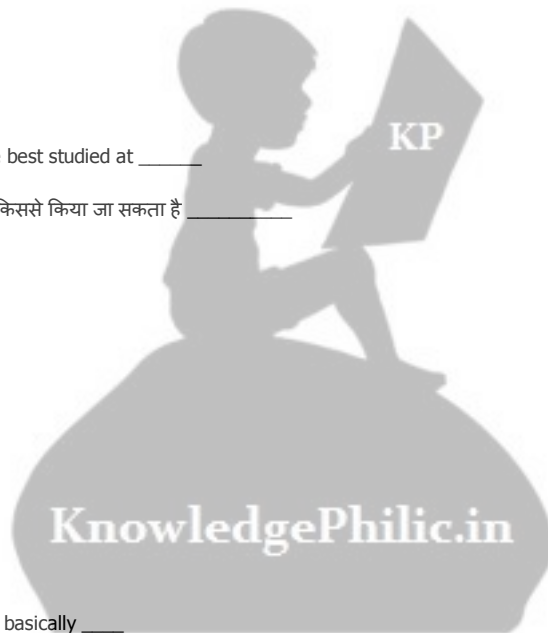
- 1) an inductor
प्रेरक
- 2) a capacitor
संधारक
- 3) a transformer
परिणामित्र
- 4) a resistor
प्रतिरोधक

Correct Answer: an inductor
प्रेरक

Candidate Answer: a capacitor
संधारक

Question 40. Curie is an unit of _____

क्यूरी किसकी यूनिट है ?



Options:

- 1) Radioactivity
रेडियोधर्मिता
- 2) energy of Gamma rays
गामा किरणों की ऊर्जा
- 3) intensity of Gamma rays
गामा किरणों की तीव्रता
- 4) work function
कार्य फलन

Correct Answer: Radioactivity
रेडियोधर्मिता

Candidate Answer: Radioactivity
रेडियोधर्मिता

Question 41. In Networks, WEP stands for

नेटवर्क में WEP का क्या अर्थ है ?

Options:

- 1) Wireless Equivalent Privacy
- 2) Wired Extra Privacy
- 3) Wired Equivalent Privacy
- 4) Wireless Embedded Privacy

Correct Answer: Wired Equivalent Privacy

Candidate Answer: Wireless Embedded Privacy

Question 42. For extinguishing fire, we use _____

अग्निशमन के लिए हम किसका प्रयोग करते हैं ?

Options:

- 1) Hydrogen
हाइड्रोजन
- 2) Carbon Monoxide
कार्बन-मोनो ऑक्साइड
- 3) Carbon Dioxide
कार्बन डाई-ऑक्साइड
- 4) Marsh gas
मार्श गैस

Correct Answer: Carbon Dioxide
कार्बन डाई-ऑक्साइड

Candidate Answer: Carbon Dioxide
कार्बन डाई-ऑक्साइड

Question 43. The chemical name of quartz is _____

क्वार्ट्ज का रासायनिक नाम क्या है ?

Options:

- 1) Calcium oxide
कैल्शियम ऑक्साइड
- 2) Calcium phosphate
कैल्शियम फॉस्फेट
- 3) Sodium phosphate
सोडियम फॉस्फेट
- 4) Sodium silicate
सोडियम सिलिकेट

Correct Answer: Sodium silicate
सोडियम सिलिकेट

Candidate Answer: Sodium silicate
सोडियम सिलिकेट

Question 44. Continuous chain of mountains that rise abruptly more or less parallel to the coastline of India is

पर्वतों की लगातार श्रृंखला कौन सी है, जिसकी उत्पत्ति भारत की समुद्री सीमा के लगभग समानान्तर है



Options:

- 1) Aravalli
अरावली
- 2) Satpura
सतपुड़ा
- 3) Eastern ghats
पूर्वी घाट
- 4) Western ghats
पश्चिमी घाट

Correct Answer: Western ghats
पश्चिमी घाट

Candidate Answer: Western ghats
पश्चिमी घाट

Question 45. The biggest reserves of Thorium are in ____

थोरियम का सबसे बड़ा भण्डार कहाँ है ?

Options:

- 1) China
चीन
- 2) USA
यू.एस.ए
- 3) India
भारत
- 4) France
फ्रॉंस

Correct Answer: India
भारत

Candidate Answer: India
भारत

Question 46. Which of the following became the first country in the world to legalise euthanasia?

निम्नलिखित में से कौन सा देश इच्छामृत्यु को कानूनी बनाने वाला विश्व का प्रथम देश बना ?

Options:

- 1) Belgium
बेल्जियम
- 2) Netherlands
नीदरलैंड्स
- 3) Denmark
डेनमार्क
- 4) Canada
कनाडा

Correct Answer: Netherlands
नीदरलैंड्स

Candidate Answer: Netherlands
नीदरलैंड्स

Question 47. Which of the following countries won Euro Cup 2016 (football)?

निम्नलिखित में से किस देश ने यूरो कप 2016 (फुटबाल) का खिताब जीता ?

Options:

- 1) France
फ्रॉंस
- 2) Germany
जर्मनी
- 3) Portugal
पुर्तगाल
- 4) Iceland
आइसलैंड

Correct Answer: Portugal
पुर्तगाल

Candidate Answer: Germany
जर्मनी



Question 48. Shivkumar Sharma is famous for playing the ____

शिव कुमार शर्मा किसके प्रसिद्ध वादक हैं ?

Options:

- 1) Sitar
सितार
- 2) Flute
बांसुरी
- 3) Santoor
संतूर
- 4) Tabla
तबला

Correct Answer: Santoor

संतूर

Candidate Answer: [NOT ANSWERED]

Question 49. Who among the following is popularly known as 'Blade Runner'?

निम्नलिखित में से 'ब्लेड रनर' के नाम से कौन जाना जाता है ?

Options:

- 1) Usain Bolt
उसैन बोल्ड
- 2) Oscar Carl Pistorious
ऑस्कर कार्ल पिस्टोरियस
- 3) Carl Lewis
कार्ल ल्यूईस
- 4) Ben Johnson
बैन जॉनसन

Correct Answer: Oscar Carl Pistorious

ऑस्कर कार्ल पिस्टोरियस

Candidate Answer: Oscar Carl Pistorious

ऑस्कर कार्ल पिस्टोरियस

Question 50. FCRA administered by the Ministry of Home Affairs stands for ____?

ग्रह मंत्रालय द्वारा संचालित FCRA का विस्तृत रूप क्या है ?

Options:

- 1) Foreign Currency Regulation Act
- 2) Foreign Contribution Regulation Act
- 3) Foreign Contract Regulation Act
- 4) Foreign Cartel Restriction Act

Correct Answer: Foreign Contribution Regulation Act

Candidate Answer: Foreign Contract Regulation Act

Question 51. The product of two positive integers is 2048 and one of them is twice the other. Then the small of the number is

दो धनात्मक पूर्णांकों का गुणनफल 2048 है और उनमें से एक संख्या दूसरी संख्या से दोगुनी है। तो बताइये कि उनमें से छोटी संख्या कौन-सी है ?

Options:

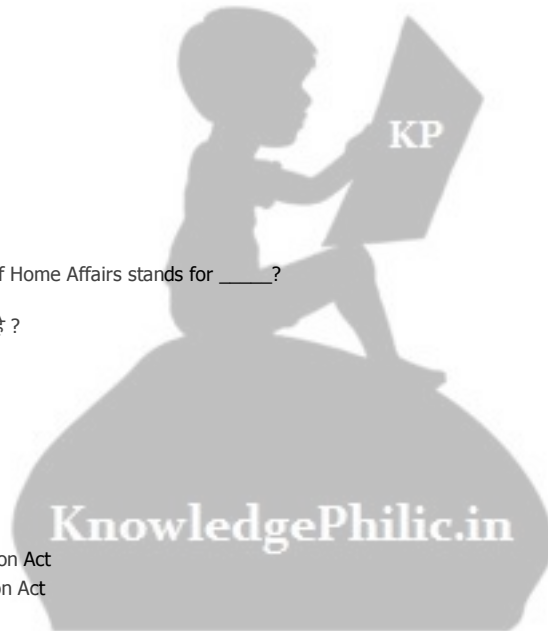
- 1) 32
- 2) 64
- 3) 16
- 4) 1024

Correct Answer: 32

Candidate Answer: 32

Question 52. A and B can do a work in 8 days, B and C can do the same work in 12 days. A, B and C together can finish it in 6 days. A and C together will do it in :

A और B मिलकर किसी काम को 8 दिन में पूरा कर सकते हैं। B और C उसी काम को 12 दिन में कर सकते हैं। A, B और C मिलकर उसी काम को 6 दिन में पूरा कर सकते हैं। बताइये कि A और C मिलकर उसी काम को कितने दिन में समाप्त करेंगे ?



Options:

- 1) 4 days
4 दिन
- 2) 6 days
6 दिन
- 3) 8days
8 दिन
- 4) 12 days
12 दिन

Correct Answer: 8days

8 दिन

Candidate Answer: 8days

8 दिन

Question 53.The diagonal of a cuboid of length 5 cm, width 4 cm and height 3cm is

5 से.मी. लंबाई, 4 से.मी. चौड़ाई और 4 से.मी. ऊँचाई के षट्फलक का विकर्ण कितना होगा ?

Options:

- 1)
 $5\sqrt{2}cm.$

 $5\sqrt{2}$ से.मी.

- 2)
 $2\sqrt{5}cm.$

 $2\sqrt{5}$ से.मी.

- 3) 12 cm.
12 से.मी.
- 4) 10 cm.
10 से.मी.

Correct Answer: $5\sqrt{2}cm.$ $5\sqrt{2}$ से.मी.**Candidate Answer:** $5\sqrt{2}cm.$ $5\sqrt{2}$ से.मी.

Question 54.An article marked at Rs. 540 is sold at Rs. 496.80 in an off-season offer. Then the rate of discount offered (in percent) is

Rs. 540 अंकित मूल्य की कोई वस्तु ऑफ सीजन ऑफर में Rs. 496.80 में बेची जाती है तो दी गई छूट की दर कितनी (प्रतिशत में) होगी ?

Options:

- 1) 7
- 2) 7.5
- 3) 8
- 4) 10

Correct Answer: 8**Candidate Answer:** 8

Question 55.Three numbers are in the ratio 5:7:12. If the sum of the first and the third is greater than the second by 50.The sum of the three numbers is

तीन संख्याएँ 5:7:12 के अनुपात में हैं। यदि उनमें से पहली तथा तीसरी संख्याओं का योग, दूसरी संख्या से 50 अधिक हो, तो तीनों संख्याओं का योग कितना होगा ?

Options:

- 1) 125
- 2) 120
- 3) 95
- 4) 85

Correct Answer: 120**Candidate Answer:** 120

Question 56. The average age of 10 children is 9 years 9 months. The average of 9 children is 8 years 11 months. What is the age of the tenth child ?

10 बच्चों की औसत आयु 9 वर्ष 9 माह है। 9 बच्चों की औसत आयु 8 वर्ष 11 माह है। दसवें बच्चे की आयु कितनी है ?

Options:

- 1) 17 years 3 months
17 वर्ष 3 माह
- 2) 18 years 4 months
18 वर्ष 4 माह
- 3) 17 years 5 months
17 वर्ष 5 माह
- 4) 18 years 3 months
18 वर्ष 3 माह

Correct Answer: 17 years 3 months

17 वर्ष 3 माह

Candidate Answer: 17 years 3 months

17 वर्ष 3 माह

Question 57. Gopi goes from place A to B to buy an article costing 15% less at B. although he spends Rs. 150 on travelling, still he gains Rs. 150 compared to buying it at A. His profit percent is :

गोपी किसी वस्तु को खरीदने के लिए स्थान A से स्थान B तक जाता है क्योंकि स्थान B पर वह वस्तु 15% कम मूल्य पर मिलती है। यद्यपि आने-जाने में उसके Rs. 150 खर्च हो जाते हैं फिर भी स्थान A से उसे खरीदने की तुलना में उसे Rs. 150 का लाभ होता है। उसका लाभ प्रतिशत क्या है ?

Options:

- 1) 4.5
- 2) 6
- 3) 7.5
- 4) 8

Correct Answer: 7.5**Candidate Answer:** [NOT ANSWERED]

Question 58. If the income of Mohan is 150% higher than Mahesh, then by what percent the income of Mahesh is less than Mohan ?

यदि मोहन की आयु महेश से 150% अधिक हो तो बताइये कि महेश की आयु मोहन से कितने प्रतिशत कम है ?

Options:

- 1) 40%
- 2) 50%
- 3) 60%
- 4) 45%

Correct Answer: 60%**Candidate Answer:** [NOT ANSWERED]

Question 59. The length of a train and that of a platform are equal. If with a speed of 90 km/hr the train crosses the platform in one minute, then the length of the train (in meters) is

एक ट्रेन और प्लेटफार्म की लंबाई बराबर है। यदि ट्रेन 90 कि.मी./घंटा की गति से प्लेटफार्म को 1 मिनट में पार करती है तो ट्रेन की लंबाई (मीटर में) कितनी है?

Options:

- 1) 500
- 2) 600
- 3) 750
- 4) 900

Correct Answer: 750**Candidate Answer:** 750

Question 60. The simple interest on a certain sum of money for 2 years at 5% is Rs. 1600. The compound interest at the same rate after 3 years interest compound annually, is

किसी धनराशि पर 5% पर 2 वर्ष का साधारण ब्याज Rs. 1600 है। वार्षिक चक्रवृद्धि ब्याज पर उसी दर पर 3 वर्ष के बाद चक्रवृद्धि ब्याज कितना होगा ?

Options:

- 1) Rs.2520
- 2) Rs.2522
- 3) Rs.2555
- 4) Rs.2535

Correct Answer: Rs.2522

Candidate Answer: Rs.2522

Question 61.

If $x + \frac{1}{x} = \sqrt{3}$, then the value of $x^3 + \frac{1}{x^3}$ is equal to

यदि $x + \frac{1}{x} = \sqrt{3}$, तो $x^3 + \frac{1}{x^3}$ का मान क्या होगा?

Options:

- 1) 1
- 2) $3\sqrt{3}$
- 3) 0
- 4) 3

Correct Answer: 0

Candidate Answer: 0

Question 62.

If $\frac{a}{b} + \frac{b}{a} = 1$, Then are value of $a^3 + b^3$ is equal to

यदि $\frac{a}{b} + \frac{b}{a} = 1$, तो $a^3 + b^3$ का एक मान क्या होगा?

Options:

- 1) 0
- 2) 1
- 3) 2
- 4) 3

Correct Answer: 0

Candidate Answer: 0

Question 63.

If $p^2 + q^2 = 7pq$, Then the value of $\frac{p}{q} + \frac{q}{p}$ is equal to


यदि $p^2 + q^2 = 7pq$ तो $\frac{p}{q} + \frac{q}{p}$ का मान क्या होगा?

Options:

- 1) 9
- 2) 5
- 3) 7
- 4) 3

Correct Answer: 7

Candidate Answer: 7



Question 64.If $x = 99$, then the value of $2(x^2 + 3x + 3)$ is equal to

यदि $x = 99$ हो, तो $2(x^2 + 3x + 3)$ का मान क्या होगा ?

Options:

1) 1000001

2) 1000000

3) 999999

4) 9999999

Correct Answer: 999999

Candidate Answer: 1000001

Question 65.The centroid of a triangle ΔABC is G. If the area of $\Delta ABC = 72$ sq. units , then the area of ΔBGC is

ΔABC का केन्द्रक G है। यदि $\Delta ABC = 72$ वर्ग यूनिट हो, तो ΔBGC का क्षेत्रफल कितना होगा ?

Options:

1) 16 sq units

16 वर्ग यूनिट

2) 24 sq units

24 वर्ग यूनिट

3) 36 sq units

36 वर्ग यूनिट

4) 48 sq units

48 वर्ग यूनिट

Correct Answer: 24 sq units

24 वर्ग यूनिट

Candidate Answer: 24 sq units

24 वर्ग यूनिट

Question 66.In case of an acute angled triangle, its orthocentre lies

न्यूनकोणीय त्रिभुज में उसका लंबकेन्द्र कहाँ होगा ?

Options:

1) inside the triangle

त्रिभुज के अन्दर

2) outside the triangle

त्रिभुज के बाहर

3) on the triangle

त्रिभुज पर

4) on one of the vertex of the triangle

त्रिभुज के किसी एक शीर्ष पर

Correct Answer: inside the triangle

त्रिभुज के अन्दर

Candidate Answer: inside the triangle

त्रिभुज के अन्दर



Question 67.If ΔPQR and ΔLMN are similar and $3PQ = LM$ and $MN = 9$ cm, then QR is equal to :

यदि ΔPQR और ΔLMN समान हैं और $3PQ = LM$ और $MN = 9$ से.मी. हो, तो QR किसके बराबर होगा ?

Options:

1) 12 cm

12 से.मी.

2) 6 cm

6 से.मी.

3) 9 cm

9 से.मी.

4) 3 cm

3 से.मी.

Correct Answer: 3 cm

3 से.मी.

Candidate Answer: 3 cm

3 से.मी.

Question 68.

AB is a chord of a circle with O as centre. C is a point on the circle such that. $OC \perp AB$ and OC intersects AB at P. If $PC = 2$ cm and $AB = 6$ cm then the diameter of the circle is

AB, O केन्द्र वाले वृत्त की जीवा है। वृत्त पर बिन्दु C इस प्रकार है कि $OC \perp AB$ और त्रिज्या OC जीवा AB को P पर काटती है। यदि $PC = 2$ से.मी. और $AB = 6$ से.मी. हो तो वृत्त का व्यास कितना है ?

Options:

- 1) 6 cm
6 से.मी.
- 2) 6.5 cm
6.5 से.मी.
- 3) 13 cm
13 से.मी.
- 4) 12 cm
12 से.मी.

Correct Answer: 6.5 cm
6.5 से.मी.

Candidate Answer: 13 cm
13 से.मी.

Question 69. If $x^2 = \sin^2 30^\circ + 4 \cot^2 45^\circ - \sec^2 60^\circ$, then the value of x ($x > 0$) is

यदि $x^2 = \sin^2 30^\circ + 4 \cot^2 45^\circ - \sec^2 60^\circ$ हो, तो x ($x > 0$) का मान क्या है ?

Options:

- 1) $-\frac{1}{2}$
- 2) 1
- 3) 0
- 4) $\frac{1}{2}$

Correct Answer: $\frac{1}{2}$

Candidate Answer: $\frac{1}{2}$

Question 70. If $7\sin^2\theta + 3\cos^2\theta = 4$ then the value of $\sec\theta + \operatorname{cosec}\theta$ is

यदि $7\sin^2\theta + 3\cos^2\theta = 4$ हो तो $\sec\theta + \operatorname{cosec}\theta$ का मान क्या होगा ?

Options:

- 1) $\frac{2}{\sqrt{3}} - 2$
- 2) $\frac{2}{\sqrt{3}} + 2$
- 3) $\frac{2}{\sqrt{3}}$

4) none of these

इनमें से कोई नहीं

Correct Answer:

$$\frac{2}{\sqrt{3}} + 2$$

Candidate Answer:

$$\frac{2}{\sqrt{3}} + 2$$

Question 71. An observer on the top of a mountain, 500 m above the sea level, observes the angles of depression of the two boats in his same place of vision to be 45° and 30° respectively. Then the distance between the boats, if the boats are on the same side of the mountain, is

एक प्रेक्षक समुन्द्र तल से 500 मी. ऊपर एक पहाड़ी चोटी के शीर्ष से अपने समान दृष्टि क्षेत्र में दो नौकाओं का अवनति कोण क्रमशः 45° और 30° देखता है। यदि दोनों नौकाएँ पहाड़ी की एक ही साइड में हैं, तो उनके बीच की दूरी कितनी होगी ?



Options:

- 1) 456 m
- 456 मी.
- 2) 584 m
- 584 मी.
- 3) 366 m
- 366 मी.
- 4) 699 m
- 699 मी.

Correct Answer: 366 m

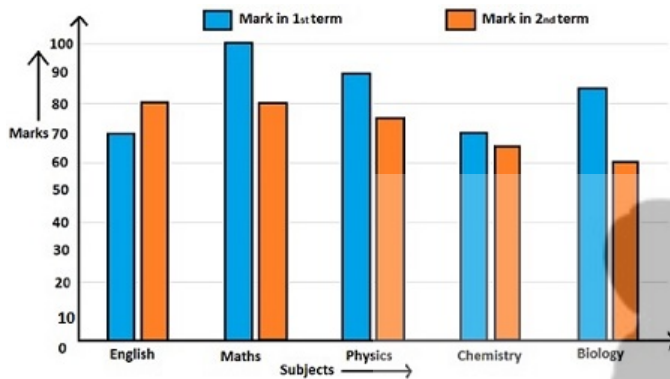
366 मी.

Candidate Answer: 366 m

366 मी.

Question 72. Study the bar diagram and answer the following questions.

बार रेखाचित्र का अध्ययन कीजिए और निम्नलिखित प्रश्नों के उत्तर दीजिए।



Average marks obtained in Physics for two terms is

दोनों क्षेत्रों में भौतिक शास्त्र में कितने प्रतिशत अंक प्राप्त हुए ?

Options:

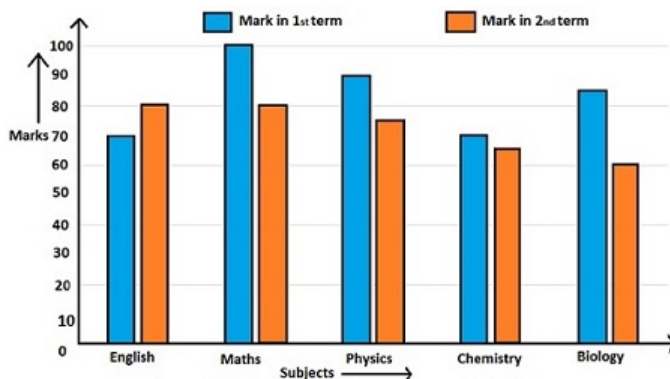
- 1) 80.5
- 2) 82.5
- 3) 72.5
- 4) 83.5

Correct Answer: 82.5

Candidate Answer: 83.5

Question 73. Study the bar diagram and answer the following questions.

बार रेखाचित्र का अध्ययन कीजिए और निम्नलिखित प्रश्नों के उत्तर दीजिए।



Difference of marks obtained in both the terms by the students is maximum in

छात्रों द्वारा दोनों सत्रों में प्राप्त अंकों का अन्तर अधिकतम किस विषय में है ?

Options:

- 1) English
अंग्रेजी
- 2) Physics
भौतिक विज्ञान
- 3) Biology
जीव विज्ञान
- 4) Mathematics
गणित

Correct Answer: Biology

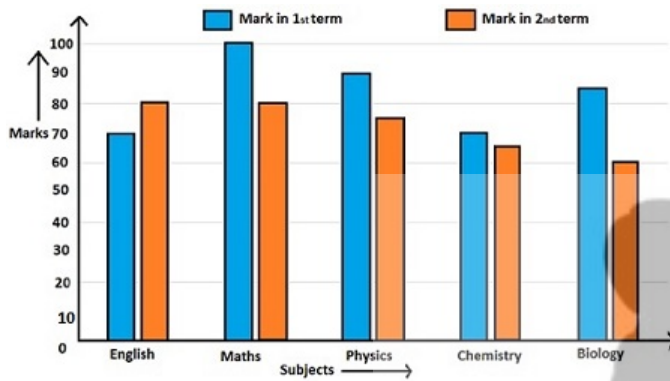
जीव विज्ञान

Candidate Answer: Biology

जीव विज्ञान

Question 74. Study the bar diagram and answer the following questions.

बार रेखाचित्र का अध्ययन कीजिए और निम्नलिखित प्रश्नों के उत्तर दीजिए।



What is the percentage of marks obtained in Chemistry for both the terms ?

दोनों सत्रों में रसायन विज्ञान में प्राप्तांकों का प्रतिशत कितना है ?

Options:

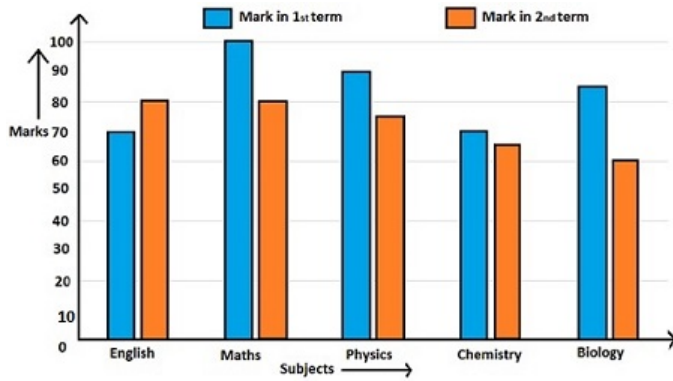
- 1) 76.5
- 2) 56.7
- 3) 75.6
- 4) 67.5

Correct Answer: 67.5**Candidate Answer:** 67.5

KnowledgePhilic.in

Question 75. Study the bar diagram and answer the following questions.

बार रेखाचित्र का अध्ययन कीजिए और निम्नलिखित प्रश्नों के उत्तर दीजिए।



The ratio of the average of the marks obtained in Biology for two terms to the average of the marks obtained in English and Mathematics for first term only is

दोनों सत्रों के जीव विज्ञान में प्राप्त औसत अंकों तथा केवल प्रथम सत्र में अंग्रेजी और गणित में प्राप्त औसत अंकों का अनुपात क्या है ?

Options:

- 1) 43:92
- 2) 39:42
- 3) 29:34
- 4) 23:94

Correct Answer: 29:34

Candidate Answer: 29:34

Question 76. In the following question, out of the four alternatives, choose the word which best expresses the meaning of the given word and click the button corresponding to it.

VENIAL

Options:

- 1) CORRUPT
- 2) SUPERFICIAL
- 3) RESPECTED
- 4) PARDONABLE

Correct Answer: PARDONABLE

Candidate Answer: PARDONABLE

Question 77. In the following question, out of the four alternatives, choose the word which is opposite in meaning to the given word and click the button corresponding to it.

DIFFIDENT

Options:

- 1) SHY
- 2) BRAVE
- 3) CONFIDENT
- 4) MEEK

Correct Answer: CONFIDENT

Candidate Answer: BRAVE

Question 78. Four words are given, out of which only one word is spelt correctly. Choose the correctly spelt word and click the button corresponding to it.

Options:

- 1) Monolouge
- 2) Monologue
- 3) Monologe
- 4) Monolouge

Correct Answer: Monologue

Candidate Answer: Monologue

Question 79. In the following questions, one part of the sentence may have an error. Find out which part of the sentence has an error and click the button corresponding to it. If the sentence is free from error, click the "No error" option.

We must go (A) / and congratulate him for (B) / his brilliant success (C) / No Error (D)

Options:

- 1) A
- 2) B
- 3) C
- 4) D

Correct Answer: B

Candidate Answer: D

Question 80. In the following questions, one part of the sentence may have an error. Find out which part of the sentence has an error and click the button corresponding to it. If the sentence is free from error, click the "No error" option.

My brother (A) / along with his friends (B) / are going on a tour (C) / No error (D)

Options:

- 1) A
- 2) B
- 3) C
- 4) D

Correct Answer: C

Candidate Answer: C

Question 81. In the following questions, one part of the sentence may have an error. Find out which part of the sentence has an error and click the button corresponding to it. If the sentence is free from error, click the "No error" option.

You have prepared well (A) / for the examination (B) / isn't it ? (C) / No error (D)

Options:

- 1) A
- 2) B
- 3) C
- 4) D

Correct Answer: C

Candidate Answer: C

Question 82. The sentences given with blanks are to be filled with an appropriate word(s). Four alternatives are suggested for each question. For each question, choose the correct alternative and click the button corresponding to it.

What good fortune! I found the very thing I was _____!

Options:

- 1) looking in
- 2) looking to
- 3) looking besides
- 4) looking for

Correct Answer: looking for

Candidate Answer: looking for

Question 83. The sentences given with blanks are to be filled with an appropriate word(s). Four alternatives are suggested for each question. For each question, choose the correct alternative and click the button corresponding to it.

The swimmer _____ his clothes and jumped into the river.

Options:

- 1) took off
- 2) took of
- 3) took out
- 4) took down

Correct Answer: took off

Candidate Answer: took out

Question 84. The sentences given with blanks are to be filled with an appropriate word(s). Four alternatives are suggested for each question. For each question, choose the correct alternative and click the button corresponding to it.

I will _____ to Singapore next month.

Options:

- 1) be travelling
- 2) be travel
- 3) travels
- 4) am travelled

Correct Answer: be travelling

Candidate Answer: be travelling

Question 85. In each of the questions, four alternatives are given for the Idiom/Phrase. Choose the alternative which best expresses the meaning of the Idiom/Phrase and click the button corresponding to it.

Made light of

Options:

- 1) Did not hear
- 2) Treated it lightly
- 3) Blew away
- 4) Carried with him

Correct Answer: Treated it lightly

Candidate Answer: Did not hear

Question 86. In each of the questions, four alternatives are given for the Idiom/Phrase. Choose the alternative which best expresses the meaning of the Idiom/Phrase and click the button corresponding to it.

Every inch a gentleman

Options:

- 1) Somewhat
- 2) Partly
- 3) Entirely
- 4) Calculatively

Correct Answer: Entirely

Candidate Answer: Entirely

Question 87. In each of the questions, four alternatives are given for the Idiom/Phrase. Choose the alternative which best expresses the meaning of the Idiom/Phrase and click the button corresponding to it.

Gall and wormwood

Options:

- 1) A problem
- 2) Hateful
- 3) Useless
- 4) Hard to digest

Correct Answer: Hateful

Candidate Answer: Hard to digest

Question 88. Out of the four alternatives, choose the one which can be substituted for the given words/sentences and click the button corresponding to it.

A rough, violent, troublesome person.

Options:

- 1) Tartar
- 2) Talker
- 3) Vagabond
- 4) Swindler

Correct Answer: Tartar

Candidate Answer: Vagabond

Question 89. Out of the four alternatives, choose the one which can be substituted for the given words/sentences and click the button corresponding to it.

A brave, noble-minded or chivalrous man

Options:

- 1) Handsome
- 2) Robust
- 3) Gallant
- 4) Reckless

Correct Answer: Gallant

Candidate Answer: Robust

Question 90. Out of the four alternatives, choose the one which can be substituted for the given words/sentences and click the button corresponding to it.

Obsession with books

Options:

- 1) Bibliomania
- 2) Megalomania
- 3) Xenophobia
- 4) Ego mania

Correct Answer: Bibliomania

Candidate Answer: Bibliomania

Question 91. A sentence/a part of the sentence is underlined. Four alternatives are given to the underlined part which will improve the sentence. Choose the correct alternative and click the button corresponding to it. In case no improvement is needed, click the button corresponding to "No improvement".

The farmers work at the fields

Options:

- 1) on the fields
- 2) through the fields
- 3) in the fields
- 4) No improvement

Correct Answer: in the fields

Candidate Answer: on the fields



Question 92. A sentence/a part of the sentence is underlined. Four alternatives are given to the underlined part which will improve the sentence. Choose the correct alternative and click the button corresponding to it. In case no improvement is needed, click the button corresponding to "No improvement".

The boss impatiently told him to get up with his work.

Options:

- 1) to get on
- 2) to get by
- 3) to get under
- 4) No improvement

Correct Answer: to get on

Candidate Answer: to get on

Question 93. A sentence/a part of the sentence is underlined. Four alternatives are given to the underlined part which will improve the sentence. Choose the correct alternative and click the button corresponding to it. In case no improvement is needed, click the button corresponding to "No improvement".

The judges remarked on the high standard of entries for the competition.

Options:

- 1) remarked of
- 2) remarked at
- 3) remarked over
- 4) No improvement

Correct Answer: No improvement

Candidate Answer: remarked at

Question 94. A sentence/a part of the sentence is underlined. Four alternatives are given to the underlined part which will improve the sentence. Choose the correct alternative and click the button corresponding to it. In case no improvement is needed, click the button corresponding to "No improvement".

He did not know how to solve the problem and I did not either

Options:

- 1) neither do I
- 2) neither did I
- 3) either did I
- 4) No improvement

Correct Answer: neither did I

Candidate Answer: neither did I

Question 95. A sentence/a part of the sentence is underlined. Four alternatives are given to the underlined part which will improve the sentence. Choose the correct alternative and click the button corresponding to it. In case no improvement is needed, click the button corresponding to "No improvement".

It is a place far of here

Options:

- 1) far by here
- 2) far from here
- 3) far away here
- 4) No improvement

Correct Answer: far from here

Candidate Answer: far from here

Question 96. A passage is given with 5 questions following it. Read the passage carefully and choose the best answer to each question out of the four alternatives and click the button corresponding to it.

Mary Garden, a noted opera singer, earned a great deal of money during her career, but was constantly bothered by the demands of her father for money - and always in large sums.

Miss Garden would always give it to him, though often she would often complain that his requests seemed somewhat unreasonable. To this the stock reply was that he needed the money for a very special project. She was not going to refuse her father, was she ?

During the depression Miss Garden, like many others, lost her money in the stock market crash. Shortly afterward, her father died, and, much to her surprise, she was notified that he had left a large bank account in her name. He had saved for her every cent she had given him.

The demands God makes on us may seem hard at times. But all the while He is actually helping us to store up an 'eternal bank account' in heaven - one which may balance the scales in our favour when we least expect it. Troubles are often the instruments by which God fashions us for better things.

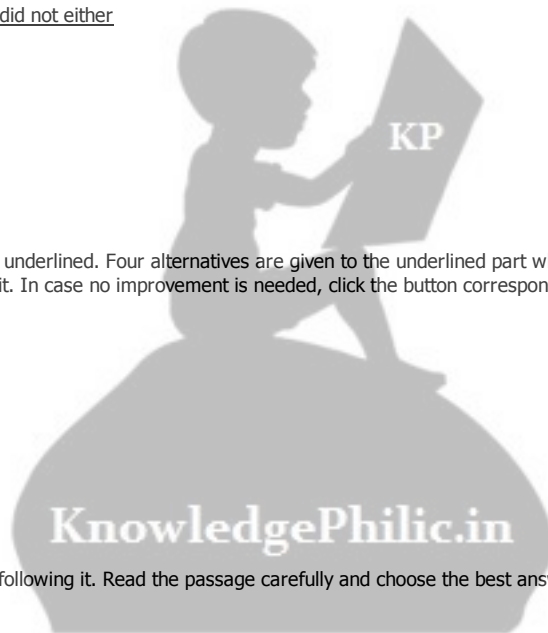
Mary's father made demands for _____

Options:

- 1) a small sum of money
- 2) large sums of money
- 3) no money
- 4) a reasonable sum of money

Correct Answer: large sums of money

Candidate Answer: large sums of money



Question 97. A passage is given with 5 questions following it. Read the passage carefully and choose the best answer to each question out of the four alternatives and click the button corresponding to it.

Mary Garden, a noted opera singer, earned a great deal of money during her career, but was constantly bothered by the demands of her father for money - and always in large sums.

Miss Garden would always give it to him, though often she would often complain that his requests seemed somewhat unreasonable. To this the stock reply was that he needed the money for a very special project. She was not going to refuse her father, was she ?

During the depression Miss Garden, like many others, lost her money in the stock market crash. Shortly afterward, her father died, and, much to her surprise, she was notified that he had left a large bank account in her name. He had saved for her every cent she had given him.

The demands God makes on us may seem hard at times. But all the while He is actually helping us to store up an 'eternal bank account' in heaven - one which may balance the scales in our favour when we least expect it. Troubles are often the instruments by which God fashions us for better things.

Mary _____ to the demands of her father.

Options:

- 1) could not refuse to pay any attention
- 2) wanted to refuse to pay any attention
- 3) finally refused to pay any attention
- 4) initially refused to pay any attention

Correct Answer: could not refuse to pay any attention

Candidate Answer: could not refuse to pay any attention

Question 98. A passage is given with 5 questions following it. Read the passage carefully and choose the best answer to each question out of the four alternatives and click the button corresponding to it.

Mary Garden, a noted opera singer, earned a great deal of money during her career, but was constantly bothered by the demands of her father for money - and always in large sums.

Miss Garden would always give it to him, though often she would often complain that his requests seemed somewhat unreasonable. To this the stock reply was that he needed the money for a very special project. She was not going to refuse her father, was she ?

During the depression Miss Garden, like many others, lost her money in the stock market crash. Shortly afterward, her father died, and, much to her surprise, she was notified that he had left a large bank account in her name. He had saved for her every cent she had given him.

The demands God makes on us may seem hard at times. But all the while He is actually helping us to store up an 'eternal bank account' in heaven - one which may balance the scales in our favour when we least expect it. Troubles are often the instruments by which God fashions us for better things.

Mary's father had _____ all the money he took from her.

Options:

- 1) gambled
- 2) wasted
- 3) invested
- 4) saved

Correct Answer: saved

Candidate Answer: saved

Question 99. A passage is given with 5 questions following it. Read the passage carefully and choose the best answer to each question out of the four alternatives and click the button corresponding to it.

Mary Garden, a noted opera singer, earned a great deal of money during her career, but was constantly bothered by the demands of her father for money - and always in large sums.

Miss Garden would always give it to him, though often she would often complain that his requests seemed somewhat unreasonable. To this the stock reply was that he needed the money for a very special project. She was not going to refuse her father, was she ?

During the depression Miss Garden, like many others, lost her money in the stock market crash. Shortly afterward, her father died, and, much to her surprise, she was notified that he had left a large bank account in her name. He had saved for her every cent she had given him.

The demands God makes on us may seem hard at times. But all the while He is actually helping us to store up an 'eternal bank account' in heaven - one which may balance the scales in our favour when we least expect it. Troubles are often the instruments by which God fashions us for better things.

During the depression Mary _____ in the stock market.

Options:

- 1) lost no money at all
- 2) lost her money
- 3) lost some money
- 4) lost lot of money

Correct Answer: lost her money

Candidate Answer: lost her money

Question 100. A passage is given with 5 questions following it. Read the passage carefully and choose the best answer to each question out of the four alternatives and click the button corresponding to it.

Mary Garden, a noted opera singer, earned a great deal of money during her career, but was constantly bothered by the demands of her father for money - and always in large sums.

Miss Garden would always give it to him, though often she would often complain that his requests seemed somewhat unreasonable. To this the stock reply was that he needed the money for a very special project. She was not going to refuse her father, was she ?

During the depression Miss Garden, like many others, lost her money in the stock market crash. Shortly afterward, her father died, and, much to her surprise, she was notified that he had left a large bank account in her name. He had saved for her every cent she had given him.

The demands God makes on us may seem hard at times. But all the while He is actually helping us to store up an 'eternal bank account' in heaven - one which may balance the scales in our favour when we least expect it. Troubles are often the instruments by which God fashions us for better things.

God at times, makes hard demands so that He _____ when we least expect it.

Options:

- 1) can balance the scales against us
- 2) can balance the scales in our favour
- 3) can harm us
- 4) can refuse to assist us

Correct Answer: can balance the scales in our favour

Candidate Answer: can balance the scales in our favour

